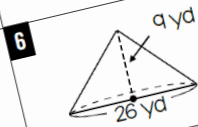
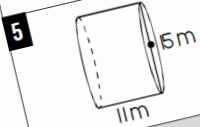
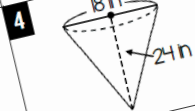
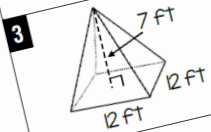


VOLUME & SURFACE AREA

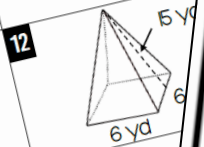
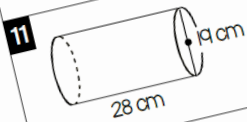
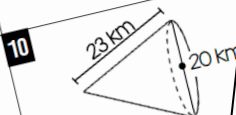
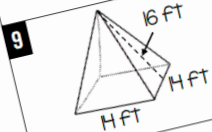
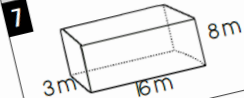
Coloring Activity!

Name: _____ Per: _____
Date: _____

SET 1: Find the volume of each figure below. Round all answers to the nearest tenth.



SET 2: Find the surface area of each figure below. Round all answers to the nearest tenth.



Match the question number with the answer below.

Red: 15928	Yellow: 20358
Light Green: 585	Dark Green: 400
Dark Blue: 336	Purple: 10053
Brown: 5011	Black: 19439

