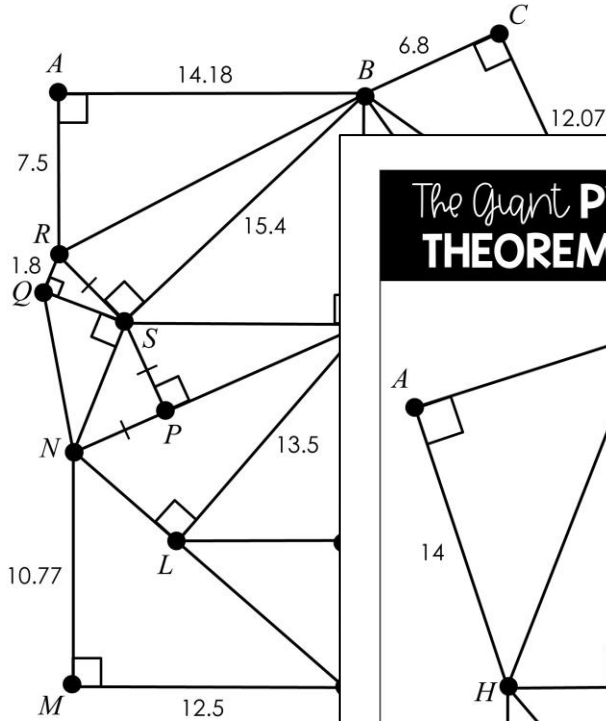


The Great PYTHAGOREAN THEOREM CHALLENGE! V3

Name: _____

Date: _____ Period: _____

Directions: Find each measure.
Round all measures to the nearest hundredth.



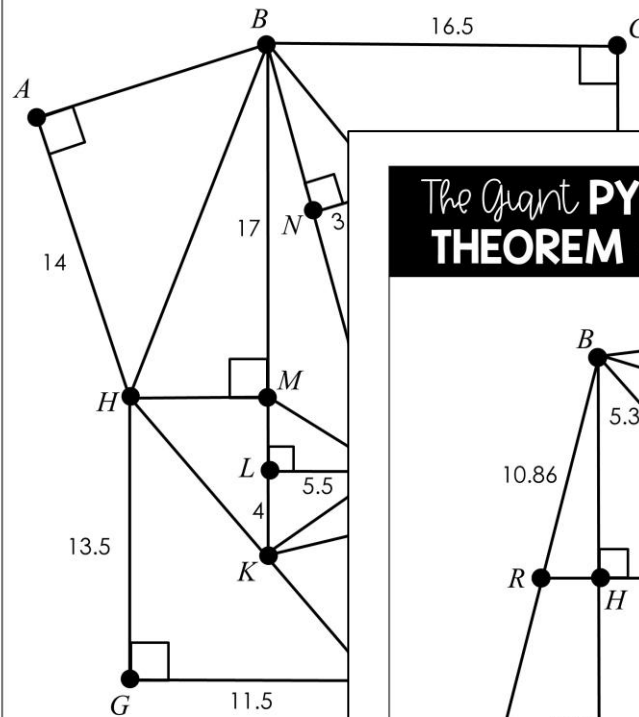
RB = _____ DE = _____

The Great PYTHAGOREAN THEOREM CHALLENGE! V2

Name: _____

Date: _____ Period: _____

Directions: Find each measure.
Round all measures to the nearest hundredth.



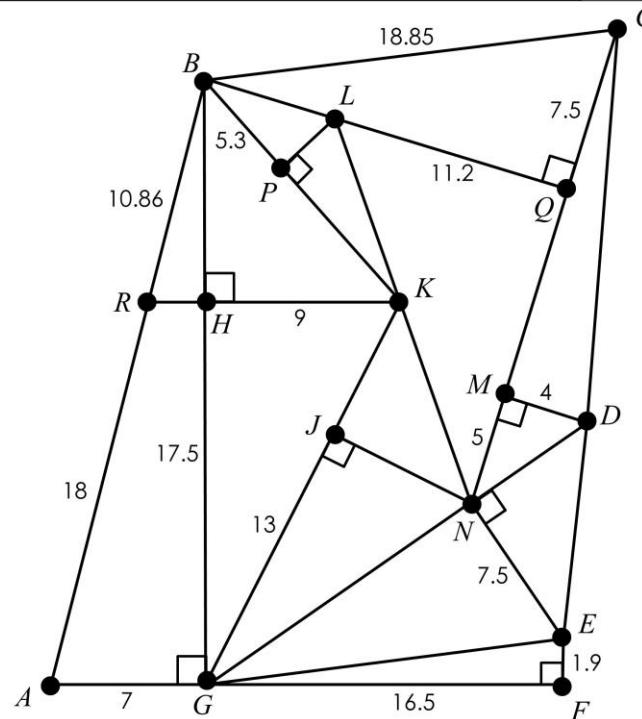
AB = _____ JD = _____

The Great PYTHAGOREAN THEOREM CHALLENGE! V1

Name: _____

Date: _____ Period: _____

Directions: Find each measure.
Round all measures to the nearest hundredth.



- AB = _____ LP = _____
- BG = _____ LK = _____
- BH = _____ KN = _____
- BK = _____ LN = _____
- PK = _____ QN = _____
- GK = _____ QM = _____
- JK = _____ CM = _____
- JN = _____ CD = _____
- GN = _____ ND = _____
- GE = _____ DE = _____
- BQ = _____ RH = _____
- BL = _____

